


Connect the Plot




Instructions

Plot the points listed below and **connect them in the order** in which they are written.

- | | | | |
|----------|----------|-----------|-----------|
| 1. (1,a) | 5. (7,f) | 9. (3,f) | 13. (1,a) |
| 2. (4,c) | 6. (6,f) | 10. (2,f) | |
| 3. (7,a) | 7. (5,f) | 11. (1,f) | |
| 4. (6,d) | 8. (4,h) | 12. (2,d) | |

Connect the Plot




Instructions

Plot the points listed below and **connect them in the order** in which they are written.

- | | | | |
|----------|----------|-----------|-----------|
| 1. (4,f) | 5. (7,e) | 9. (3,c) | 13. (2,g) |
| 2. (5,g) | 6. (6,d) | 10. (2,d) | 14. (3,g) |
| 3. (6,g) | 7. (5,c) | 11. (1,e) | 15. (4,f) |
| 4. (7,f) | 8. (4,b) | 12. (1,f) | |

Connect the Plot




Instructions

Plot the points listed below and **connect them in the order** in which they are written.

- | | | | | |
|----------|----------|-----------|-----------|-------------------------------|
| 1. (8,e) | 5. (4,b) | 9. (1,e) | 12. (5,g) | 16. (7,d) |
| 2. (7,d) | 6. (3,b) | 10. (2,f) | 13. (6,f) | 17. (7,e) |
| 3. (6,c) | 7. (2,c) | 11. (3,g) | 14. (7,e) | 18. (8,e) |
| 4. (5,b) | 8. (1,d) | 12. (4,g) | 15. (8,d) | 19. Make a large dot at (5,e) |

Connect the Plot




Instructions

Plot the points listed below and **connect them in the order** in which they are written.

- | | | | | |
|----------|----------|-----------|-----------|-------------------------------|
| 1. (1,e) | 5. (5,f) | 9. (8,d) | 13. (7,f) | 17. (3,c) |
| 2. (2,f) | 6. (6,e) | 10. (8,e) | 14. (6,e) | 18. (2,d) |
| 3. (3,g) | 7. (7,d) | 11. (8,f) | 15. (5,d) | 19. (1,e) |
| 4. (4,g) | 8. (8,c) | 12. (8,g) | 16. (4,c) | 20. Make a large dot at (3,e) |

Connect the Plot




Instructions

Plot the points listed below and **connect them in the order** in which they are written.

- | | | | | | | | |
|----------|-----------|-----------|-----------|-----------|-----------|-----------|-----------|
| 1. (5,e) | 6. (4,c) | 11. (3,g) | 16. (8,g) | 21. (8,b) | 26. (4,a) | 31. (1,c) | 36. (1,h) |
| 2. (6,e) | 7. (3,c) | 12. (4,g) | 17. (8,f) | 22. (8,a) | 27. (3,a) | 32. (1,d) | |
| 3. (6,d) | 8. (3,d) | 13. (5,g) | 18. (8,e) | 23. (7,a) | 28. (2,a) | 33. (1,e) | |
| 4. (6,c) | 9. (3,e) | 14. (6,g) | 19. (8,d) | 24. (6,a) | 29. (1,a) | 34. (1,f) | |
| 5. (5,c) | 10. (3,f) | 15. (7,g) | 20. (8,c) | 25. (5,a) | 30. (1,b) | 35. (1,g) | |

Connect the Plot




Instructions

Plot the points listed below and **connect them in the order** in which they are written.

- | | | | | | | |
|----------|-----------|-----------|-----------|-------------------|-----------|-------------------------------|
| 1. (1,f) | 6. (6,h) | 11. (8,c) | 16. (3,a) | 21. (1,f) | 24. (5,d) | 29. Make a large dot at (3,e) |
| 2. (2,g) | 7. (7,g) | 12. (7,b) | 17. (2,b) | Begin a new shape | 25. (6,d) | 30. Make a large dot at (6,e) |
| 3. (3,h) | 8. (8,f) | 13. (6,a) | 18. (1,c) | 22. (3,d) | 26. (5,c) | |
| 4. (4,h) | 9. (8,e) | 14. (5,a) | 19. (1,d) | 23. (4,d) | 27. (4,c) | |
| 5. (5,h) | 10. (8,d) | 15. (4,a) | 20. (1,e) | 28. (3,d) | | |

Connect the Plot



Instructions

Draw a shape on the grid, then write your plot points below.

- 1. _____
- 2. _____
- 3. _____
- 4. _____